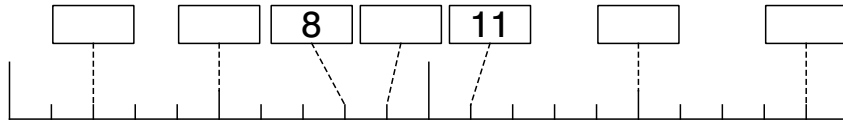
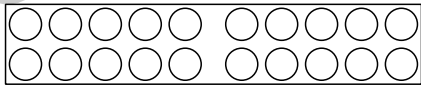


Zbrajanje i oduzimanje do 20

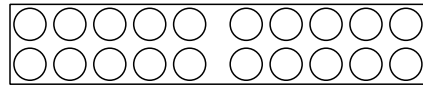
1 Dopuni brojevnju crtu.



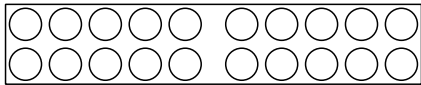
2 Izračunaj



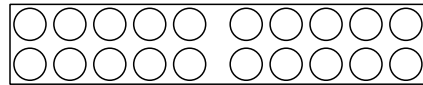
$$16 + 3 = \underline{\quad}$$



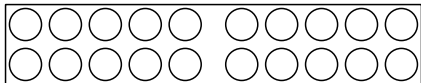
$$9 + 7 = \underline{\quad}$$



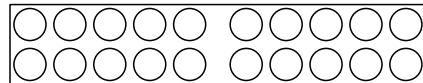
$$15 + 2 = \underline{\quad}$$



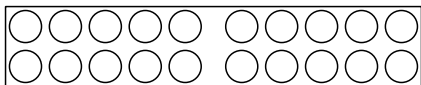
$$16 + 3 = \underline{\quad}$$



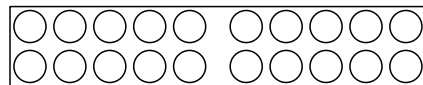
$$10 + 5 = \underline{\quad}$$



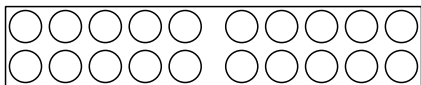
$$3 + 16 = \underline{\quad}$$



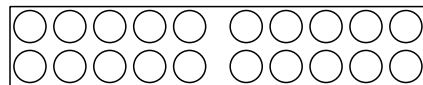
$$7 + 13 = \underline{\quad}$$



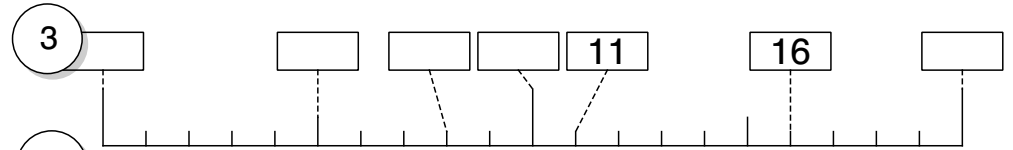
$$11 + 2 = \underline{\quad}$$



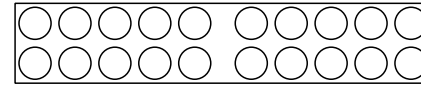
$$10 + 5 = \underline{\quad}$$



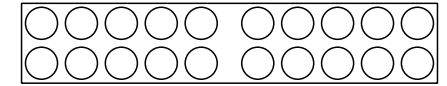
$$14 + 6 = \underline{\quad}$$



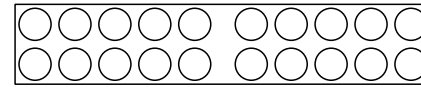
4



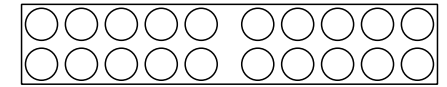
$$12 + 8 = \underline{\quad}$$



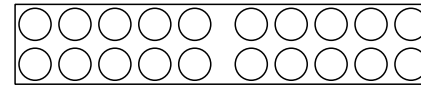
$$8 + 9 = \underline{\quad}$$



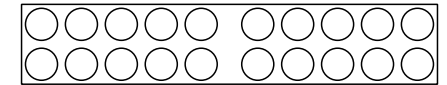
$$11 + 1 = \underline{\quad}$$



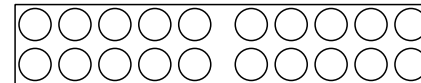
$$11 + 5 = \underline{\quad}$$



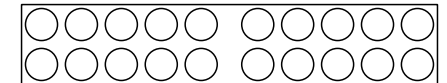
$$13 + 2 = \underline{\quad}$$



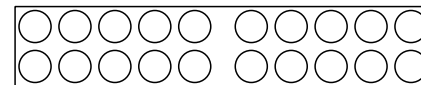
$$16 + 4 = \underline{\quad}$$



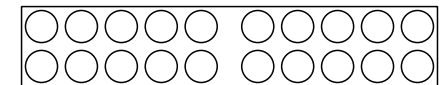
$$8 + 10 = \underline{\quad}$$



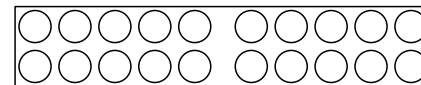
$$11 + 2 = \underline{\quad}$$



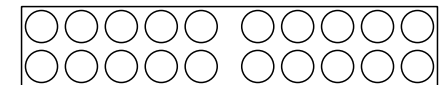
$$13 + 6 = \underline{\quad}$$



$$9 + 5 = \underline{\quad}$$



$$9 + 10 = \underline{\quad}$$



$$5 + 11 = \underline{\quad}$$