

1. ZBROJI! TOČAN REZULTAT UPIŠI U KUĆICU.

$1 + 1 = \square$

$4 + 0 = \square$

$2 + 2 = \square$

$5 + 0 = \square$

$3 + 2 = \square$

$2 + 3 = \square$

2. ODUZIMI! TOČAN REZULTAT UPIŠI U KUĆICU.

$1 - 1 = \square$

$5 - 2 = \square$

$2 - 1 = \square$

$4 - 0 = \square$

$3 - 2 = \square$

$3 - 3 = \square$

13. ZADATAK:

MAMA IMA 5



TATA JE POSUDIO 2



KOLIKO BOJICA JE OSTALO MAMI?


MAMA




TATA




-



-



=



¹ Slike su preuzete sa stranice Vector Stock <https://www.vectorstock.com/>.